


Name: _____

Does a Turtle's Color Determine Its Age?


Follow the directions to color each turtle and find out its age.

This turtle is GREEN.




The turtle's age is $2 + 3 =$ _____

This turtle is YELLOW.




The turtle's age is $3 + 4 =$ _____

This turtle is PURPLE.



The turtle's age is $1 + 5 =$ _____

This turtle is BLUE.



The turtle's age is $3 + 2 =$ _____


My Answer: _____

Name: _____

Does a Turtle's Color Determine Its Age? - Key


Follow the directions to color each turtle and find out its age.

This turtle is GREEN.




The turtle's age is $2 + 3 = 5$

This turtle is YELLOW.




The turtle's age is $3 + 4 = 7$

This turtle is PURPLE.



The turtle's age is $1 + 5 = 6$

This turtle is BLUE.



The turtle's age is $3 + 2 = 5$

My Answer: **No**